

1 Which one of these numbers is four thousand and seventy one?

471

4071

4701

4710

2 Which is the number 6004 in words?

six hundred and four

six hundred and forty

six thousand and four

six thousand and forty

3 In the number 349.78 the 8 is worth

$\frac{8}{1000}$

$\frac{8}{100}$

$\frac{1}{8}$

$\frac{8}{10}$

4 $335 + 469$ is

704

714

804

814

5 $76 + 218 + 237$ is

431

511

531

1023

6 $352 - 63$ is

289

299

311

389

7 201×10 is

201

1810

2010

6730

8 $450 \div 50$ is

5

6

7

9

9 $544 \div 8$ is

67

68

86

88

10 $16 + 85 - 46$ is

31

55

65

75

11 What is the next number in the series?

21, 38, 55, ?

52

62

72

85

12 What is the missing number?

$90 - (?) = 19$

5

15

25

71

13 What is the missing number?

$$(\ ?) + 57 = 90$$

33

34

44

53

14 In a survey 22% of visitors to a safari park thought that the charges were too high. What percentage of visitors thought that the charges were all right?

22

78

88

112

15 What is 0.15 written as a fraction?


$\frac{15}{1000}$

$\frac{15}{100}$

150

1500

16 What fraction of the grid is shaded?



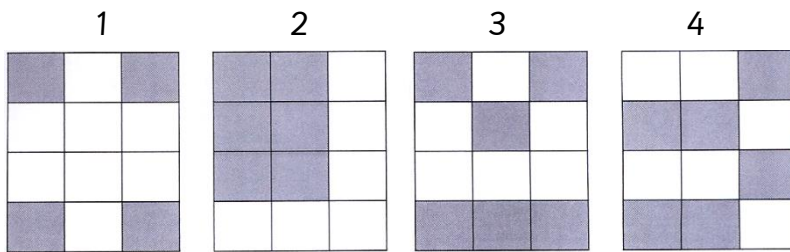
$\frac{5}{12}$

$\frac{7}{12}$

$\frac{5}{7}$

$\frac{5}{6}$

17 One-third of the squares are shaded in one of the grids. Which one is it?



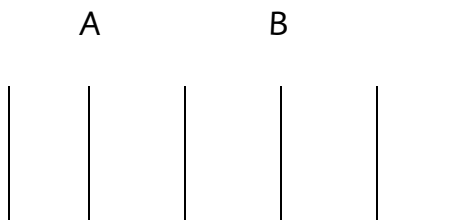
1

2

3

4

18 What fraction of the whole line is part AB?



$\frac{3}{5}$

$\frac{3}{4}$

$\frac{2}{5}$

$\frac{1}{3}$